

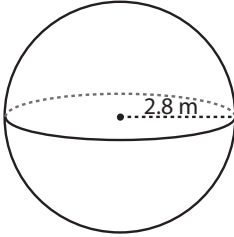
Name : _____

Score : _____

Volume - Sphere & Hemisphere

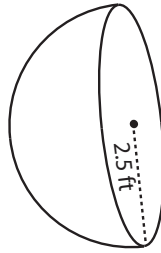
Find the volume of each shape. Round the answer to two decimal places. (use $\pi = 3.14$)

1)



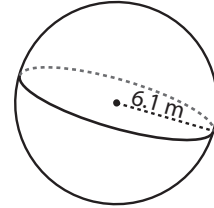
Volume = _____

2)



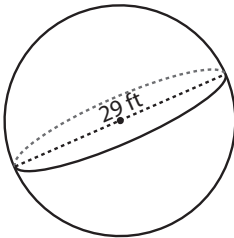
Volume = _____

3)



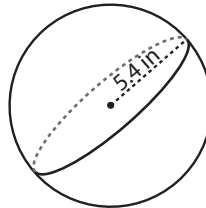
Volume = _____

4)



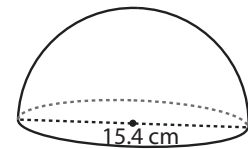
Volume = _____

5)



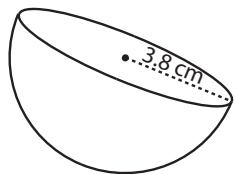
Volume = _____

6)



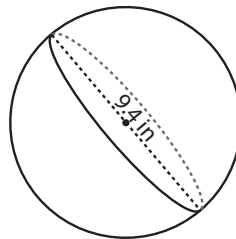
Volume = _____

7)



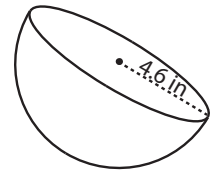
Volume = _____

8)



Volume = _____

9)



Volume = _____

10) A capsule in the shape of a sphere has a diameter of 3.7 millimeter. Find the volume of the capsule?

Volume = _____